


Lesson 1z: Practice with Ratios

Classwork
Exercises 1-10


- In a fruit basket there are 9 bananas, 4 apples, and 3 plums.
 - The ratio of bananas to apples is _____ : _____.
 - The ratio of plums to apples is _____ to _____.
 - For every _____ apples, there are _____ plums.
 - For every 3 bananas there is one _____.

- Complete the sentences to describe this picture.

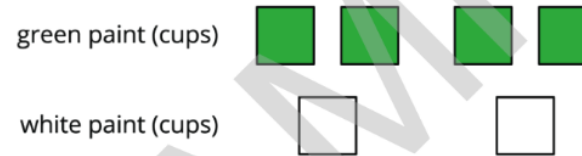


- The ratio of dogs to cats is _____.
- For every _____ dogs, there are _____ cats.

- Write two different sentences that use ratios to describe the number of eyes and legs in this picture.



- Here is a diagram that describes the cups of green and white paint in a mixture.



- Select all the statements that accurately describe this diagram.
- The ratio of cups of white paint to cups of green paint is 2 to 4.
 - For every cup of green paint, there are two cups of white paint.
 - The ratio of cups of green paint to cups of white paint is 4:2.
 - For every cup of white paint, there are two cups of green paint.
 - The ratio of cups of green paint to cups of white paint is 2:4.